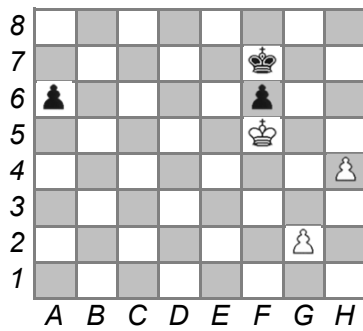


Riešte úlohy /pred riešením napíšte všetky uplatnené takticko/strateg. prvky pozície/:

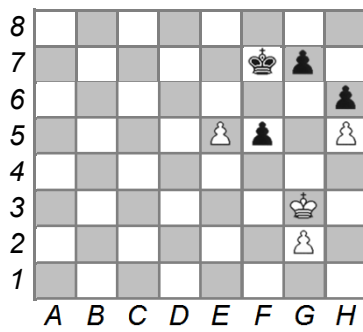
ČNT

3



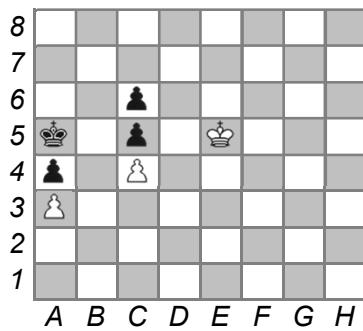
BNT

3



BNT

4



BNT

4

